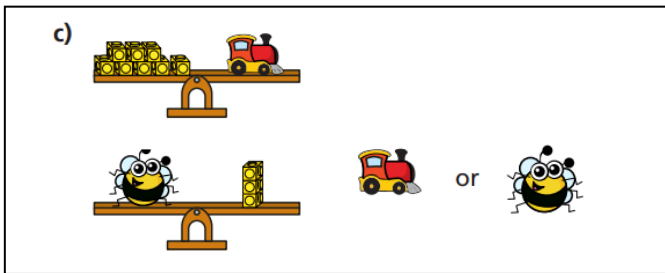
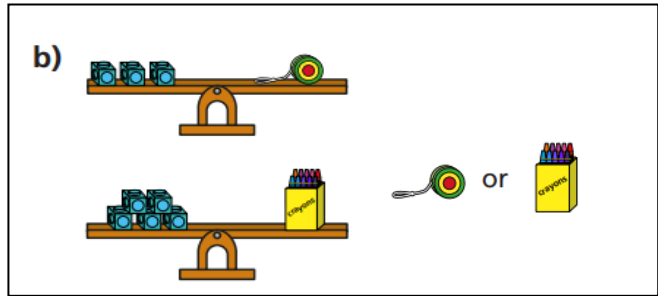
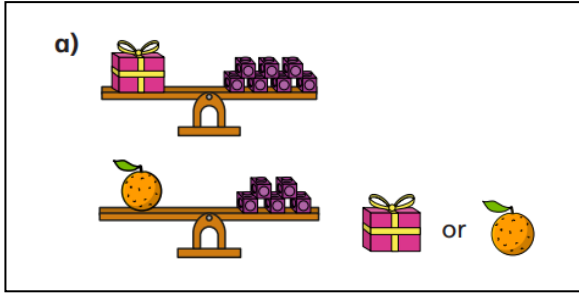



Tuesday 2nd March 2021
I can compare weight and mass

1. Which object is heavier? Count the cubes to find out.



2. Look at the scales. Count how many cubes each fruit weighs and record underneath each scale. Then choose a word to complete each sentence.



heavier

lighter

- a) The orange is _____ than the cherries.
- b) The apple is _____ than the orange.
- c) The cherries are _____ than the apple.
- d) The apple is _____ than the cherries.

3. The basketball is heavier than the football. Draw cubes to complete the scales.



Is there more than one answer?

Explain why.